

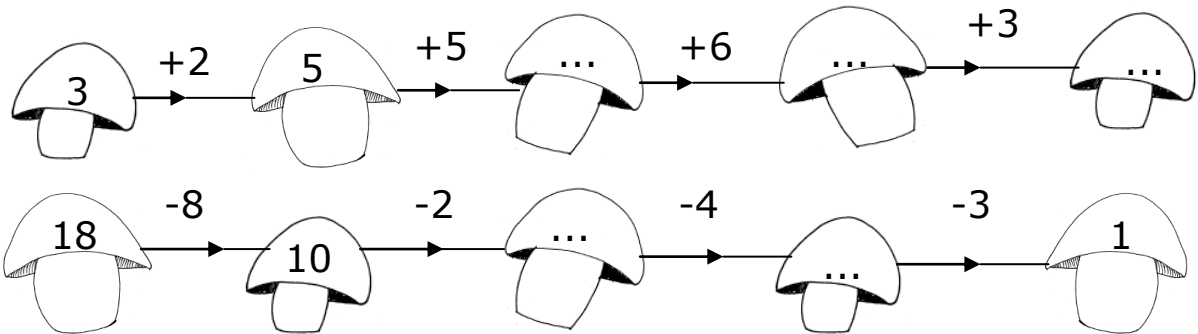


Naam: _____

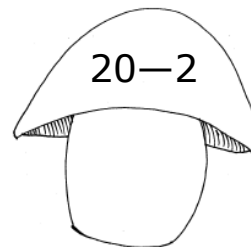
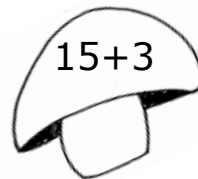
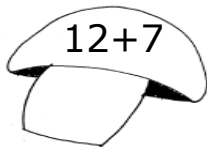
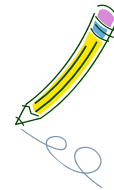


Reken netjes uit

1. Maak de champignonketting volledig.



2. Kleur de champignons die 18 als uitkomst hebben.



3. Vul in de champignon het juiste getal in.

Net na 5 komt...

Net voor 8 komt...

13 komt net voor...

16 komt net na...

